

D
21
.5
B5

UC-NRLF
C 15 578


PRACTICAL MAP EXERCISES IN MEDIEVAL AND MODERN EUROPEAN HISTORY

BY
MILDRED C. BISHOP
AND
EDWARD K. ROBINSON



YE 05388

GINN AND COMPANY
BOSTON • NEW YORK • CHICAGO • LONDON
ATLANTA • DALLAS • COLUMBUS • SAN FRANCISCO





Digitized by the Internet Archive
in 2007 with funding from
Microsoft Corporation

<http://www.archive.org/details/practicalmapexer00bishrich>

12
13
14

PREFACE

The purpose of these map studies is to fix more firmly in the mind of the student the more important geographic and political features that have influenced the history of the various countries of Europe. The importance of knowing accurately the location of places is being more universally recognized by history teachers every year. There is no more effective or quicker method of gaining that knowledge than by careful work in map studies.

Every good history today is supplied with excellent maps, but it has been repeatedly proved that too often a hasty reference to these maps results only in a confused general idea of the territory studied. Every textbook map must necessarily contain very many more features than the student is interested in at any one time. The result is that he carries away from the map a vague idea of boundaries, of the location of many cities, or of the direction of a specific trade route. But if that same student, after outlining the continent, inserts those boundaries himself, marks in the cities, or traces the trade route, he really learns their locations; they have become a part of his own background of history.

These map studies have been prepared to meet the requirements of the several texts which begin

with the reign of Charlemagne; if the class is using a text that begins with the events that followed the Thirty Years' War, Maps I, III, and IV, and the first assignment of Map II, may be omitted at the discretion of the teacher.

The extra tracing sheets make possible any additional exercises that the individual teacher may wish to have the students undertake. It has been the purpose of the authors in preparing this manual to allow for a wide range of initiative by the teacher. In courses which emphasize commercial or industrial history the students may add to their traced maps geographic or commercial features.

The flexibility of such a series of map studies as this should be kept constantly in mind. All the greater changes in the map of Europe during the past thousand years are covered by the material in this manual, but the teacher should not hesitate to adapt it to the particular needs of his own special courses.

The authors desire to express their gratitude to Mrs. Helen K. Thomas for her valuable suggestions in the construction of the map of Europe after the World War.

THE AUTHORS

B

438143

LIBRARY OF
COLUMBIA

LESSON I

EUROPE IN THE TIME OF CHARLEMAGNE (814)

Assignment I. Locate the following divisions of the original possessions of Charlemagne:

Aquitania
Austrasia
Bavaria
Britannia
Burgundy
Neustria

Locate the following countries conquered by Charlemagne and added to his territories:

Bohemia
Corsica
Italy
Lombardy

Saxony
The Spanish Marches

Locate the neighboring kingdoms:

Caliphate of Bagdad
Duchy of Beneventum
Eastern Empire
Emirate of Cordova

Locate the following important cities of Charlemagne's time:

Aix-la-Chapelle
Athens
Bremen
Constantinople
Cordova
Granada
Hamburg
Naples

Seville
Rome
Venice

Locate the following rivers:

Danube
Ebro
Elbe
Garonne
Loire
Po
Rhine
Rhone

- a. Western Frankish Kingdom
- b. Eastern Frankish Kingdom
- c. Kingdom of Italy

Locate Mersen, where the treaty of division was drawn up.

Assignment III. On the printed outline map previously used for tracing indicate (with colored crayons or other device)

The territory inherited by Charlemagne

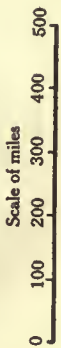
The territory conquered by Charlemagne

The territory over which his coronation by the Pope gave him a nominal authority

Assignment II. On a new sheet of tracing paper indicate the boundaries of the three parts into which the Empire was divided after the death of Charlemagne.



**EUROPE IN THE TIME
OF CHARLEMAGNE (814)**





LESSON II

THE BRITISH ISLES

NOTE. The assignments on this map may be given at such times as the student has studied the particular phase of English history necessary to the work.

Assignment I. Locate London and Chester, and indicate the Kingdom of Wessex (England in the time of Alfred the Great, 878).

Locate the mouth of the River Tweed and Solway Firth, and indicate England of the Plantagenets (after Henry II, 1154).

Indicate the England of Edward I, who annexed Wales.

Assignment II. On a new sheet of tracing paper indicate the four divisions of the present Kingdom of Great Britain and Ireland.

Locate the following cities:

Aberdeen
Bristol
Canterbury
Chester
Cork
Dublin
Edinburgh
Exeter
Galway
Glasgow
Hastings
Liverpool
London
Oxford
Salisbury
York

Locate the following islands:

Anglesey
Hebrides
Man
Orkney
Shetland
Skye
Wight

Assignment III. On the printed outline map locate the following counties of England:

NOTE. This assignment should be completed by placing the numbers of the counties on the map.

1. Bedford
2. Berkshire
3. Buckingham
4. Cambridge
5. Cheshire
6. Cornwall
7. Cumberland
8. Derby
9. Devon
10. Dorset
11. Durham
12. Essex
13. Gloucester
14. Hampshire
15. Hereford
16. Hertford
17. Huntingdon
18. Kent
19. Lancashire
20. Leicester
21. Lincoln
22. Middlesex
23. Monmouth
24. Norfolk

25. Northampton
26. Northumberland
27. Nottingham
28. Oxford
29. Rutland
30. Shropshire
31. Somerset
32. Stafford
33. Suffolk
34. Surrey
35. Sussex
36. Warwick
37. Westmorland
38. Wiltshire
39. Worcester
40. York

In the same manner locate the following counties of Wales:

1. Anglesey
2. Brecknock
3. Cardigan
4. Carmarthen
5. Carnarvon
6. Denbigh
7. Flint
8. Glamorgan
9. Merioneth
10. Montgomery
11. Pembroke
12. Radnor

In the same manner locate the following provinces of Ireland:

1. Connaught
2. Leinster
3. Munster
4. Ulster

THE BRITISH ISLES

Scale of miles

0 25 50 100 200



LESSON III

EUROPE ABOUT A. D. 1000

Assignment I. Locate the following political divisions:

Anglo-Saxon Kingdom
Bulgaria
Burgundian Kingdom
Castile
Caliphate of Cordova
• Croatia
Eastern Empire
France
Hungary
Ireland
Leon
Lithuania
Navarre
Duchy of Poland

Prussia
Russia
Scotland
Servia
Wales
Western Roman Empire (or Holy Roman Empire)

Locate the following cities of that period:

Albi
Augsburg
Avignon
Bordeaux
Canossa
Clermont
Florence

London
Marscilles
Milan
Naples
Orleans
Oxford
Paris
Rome
Venice
Verona
York

Duchy of Burgundy
County of Flanders
Duchy of Gascony
Duchy of Normandy

Indicate the following divisions in the Western Roman Empire:

Duchy of Alemanni
Mark of Austria
Duchy of Bavaria
Duchy of Bohemia
Lombardy
Mark of Moravia
Duchy of Saxony
Tuscany
Mark of Verona

Assignment II. On the printed outline map indicate the following divisions in France:

Duchy of Aquitaine
Duchy of Brittany



EUROPE ABOUT THE YEAR 1000

Scale of miles
0 100 200 300

COMMERCIAL TOWNS AND TRADE ROUTES (13TH AND 14TH CENTURIES)

<p>Assignment I. Locate the following seaports of the Venetian Water Routes:</p> <p>Alexandria Beyrout Boulogne Canea Corfu Jaffa Lisbon Naples Southampton Syracuse Venice</p>	<p>Locate the following seaports of the Hanse Routes:</p> <p>Bergen Danzig Hamburg Lübeck Riga Stettin Stockholm</p> <p>Locate the following seaports common to more than one route:</p> <p>Bruges Constantinople London Messina</p>	<p>Bologna Bordeaux Boulogne Bremen Colognc Florence Ghent Leipzig Marseilles Milan Novgorod Nuremberg Paris Rome Stettin Strasbourg Tana Vienna</p>	<p>Venice to England and the Netherlands (- - - - -) Venice to Egypt and the Eastern Mediterranean seaports (- - - - -) Genoa to Northern Africa (+ + + + +) Genoa to the Black Sea ports (+ + + + +) Hamburg to England and the Netherlands (O - O - O -) Hamburg to Norway and Iceland (O - O - O -) Hamburg to the Baltic Sea ports (O - O - O -)</p>
--	--	--	--

Locate the following seaports of the Genoese Water Routes:

Amisus
Caffa
Genoa
Tana
Trapezus (Trebizond)
Tunis

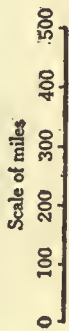
Draw with solid lines the following land routes:

Hamburg through Central Europe to Venice, Barcelona, and Bordeaux
Hamburg to Constantinople and the East
Stettin into Russia

Assignment III. On the printed outline map draw, with different colored crayons or with different kinds of lines as indicated, the following water routes. Locate the necessary cities.



**COMMERCIAL TOWNS AND TRADE ROUTES
(13TH AND 14TH CENTURIES)**



LESSON V

EUROPE AFTER THE TREATIES OF UTRECHT AND RASTADT (1713-1714)

Assignment I. Locate the following political divisions of Europe :

Kingdom of Denmark and Norway

The Holy Roman Empire

Kingdom of France

Republic of Genoa

Kingdom of Great Britain and Ireland

Kingdom of Hungary

Duchy of Milan

Duchy of Modena

Naples

Netherlands

Ottoman Dominions

Duchy of Parma

Piedmont

Kingdom of Portugal

Sardinia

Sicily

Kingdom of Spain

Kingdom of Sweden

States of the Church

Switzerland

Transylvania

Duchy of Tuscany

Republic of Venice

Locate the following cities :

Amsterdam

Berlin

Edinburgh

Genoa

Gibraltar

London

Naples

Paris

Rastadt

Rome

Utrecht

Venice

Vienna

Assignment II. On the printed outline map locate the following divisions of the Holy Roman Empire :

Alsace

Austria

Austrian Netherlands

Bavaria

Bohemia

Lorraine

Moravia

Pomerania

Prussia

Sardinia

Saxony

Silesia

Tyrol

Indicate also the territory acquired by Austria.

Spanish Netherlands

Naples

Milan

Indicate the territory acquired by England.

Gibraltar

**EUROPE AFTER THE TREATIES
OF UTRECHT AND RASTADT
(1713-1714)**

Scale of miles
0 100 200 300



LESSON VI

THE PARTITIONS OF POLAND

Assignment I. The First Partition, 1772. Indicate the territory acquired by

Austria
Prussia
Russia

Locate the cities

Lemberg
Marienburg

The Second Partition, 1793. Indicate the territory acquired by

Prussia
Russia

Locate the following cities :

Gnesen
Danzig
Kiev
Posen
Thorn

The Third Partition. Indicate the territory acquired by

Austria
Prussia
Russia

Locate the following cities :

Cracow
Lublin
Vilna
Warsaw

Assignment II. On the printed outline map indicate the following sections of Poland :

Black Russia
Curland (or Courland)
Galicia
Lithuania
Little Russia
Ludomeria
White Russia

Indicate the neighboring territories of

Austria
East Prussia
Hungary
Moldavia
Pomerania
Russia
Silesia
Sweden

Locate the following bodies of water :

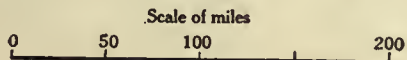
Baltic Sea
Black Sea
Gulf of Riga

Locate the following cities :

Breslau
Buda-Pest
Riga
St. Petersburg
Vienna



THE PARTITIONS OF POLAND



EUROPE AT THE TIME OF NAPOLEON'S GREATEST POWER (1810)

Assignment I. Indicate the following countries :

- a. The Empire of France
- b. Its Dependencies
 - Kingdom of Spain
 - Kingdom of Italy
 - Kingdom of Naples
 - Helvetic Republic (Switzerland)
 - Confederation of the Rhine
 - Grand Duchy of Warsaw
 - Illyrian Provinces
- c. Kingdom of Denmark
- Kingdom of Prussia
- Kingdom of Portugal
- Kingdom of Sweden

- Kingdom of Sardinia
- Kingdom of Sicily
- Kingdom of Great Britain and Ireland
- Empire of Russia
- Empire of Austria
- Turkish Empire

Assignment II. On the tracing sheet used for Assignment I locate these European cities that figured in Napoleon's career :

- Austerlitz
- Boulogne
- Borodino
- Dresden

- Friedland
- Jena
- Leipzig
- Madrid
- Milan
- Moscow
- Naples
- Paris
- Tilsit
- Toulon
- Venice
- Vienna
- Wagram
- Waterloo

Locate the isle of Elba.

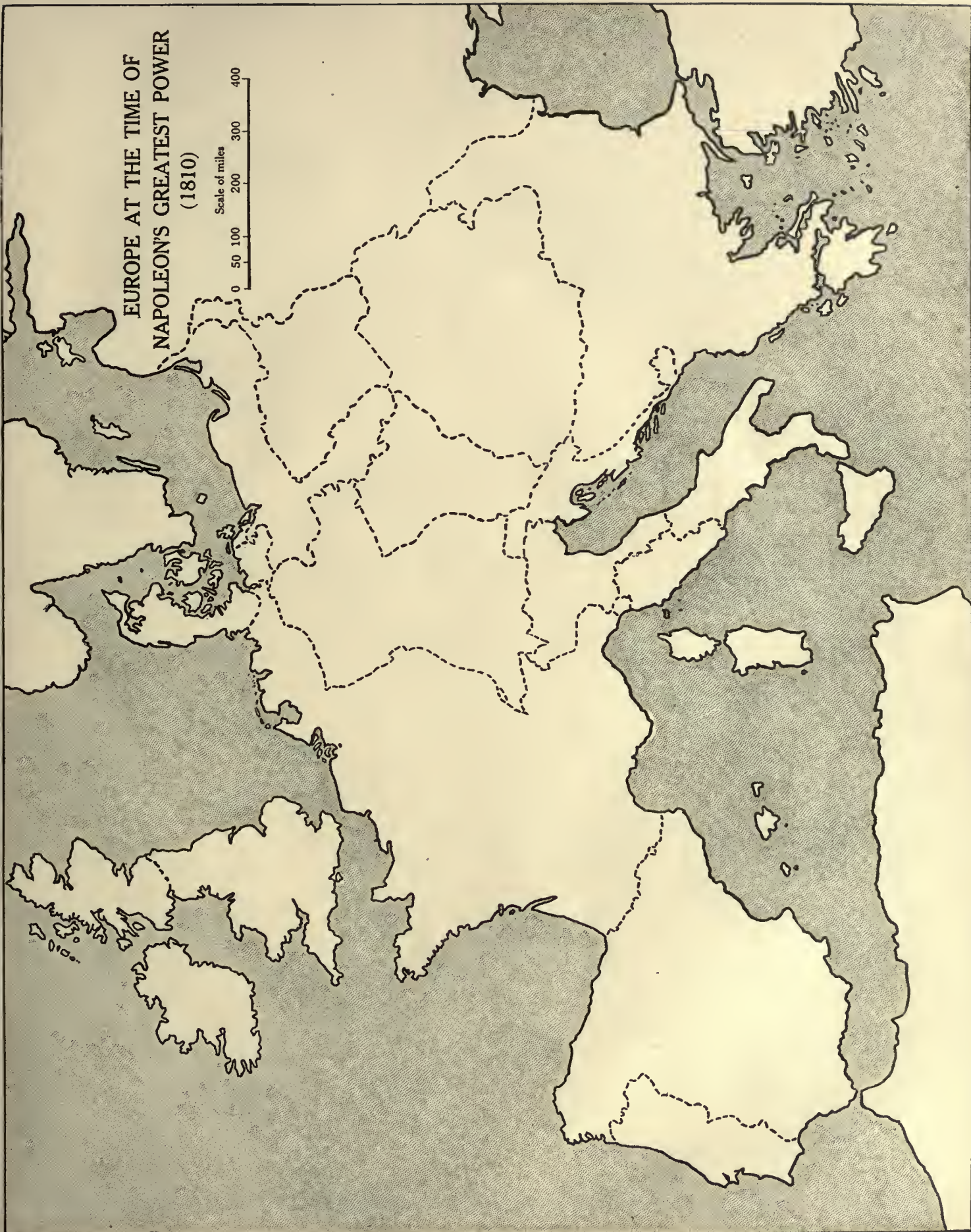
Assignment III. On the printed outline map indicate

- a. The French Republic when Napoleon first came into prominence
- b. The extent of the French Empire when Napoleon was at the height of his power
- c. The boundaries of France after the fall of Napoleon

NOTE. The above will be done from reading the text rather than from study of any particular map. It will be easiest accomplished by the use of different-colored or differently formed lines.

EUROPE AT THE TIME OF
NAPOLEON'S GREATEST POWER
(1810)

Scale of miles
0 50 100 200 300 400



LESSON VIII

CENTRAL EUROPE AFTER THE CONGRESS OF VIENNA (1815)

Assignment I. Locate the following political divisions :

- Austrian Empire
- Kingdom of Denmark
- German Confederation
- Lombardy
- Duchy of Modena
- Kingdom of Naples (or The Two Sicilies)
- Kingdom of the Netherlands
- Ottoman Empire (or Turkey)
- Kingdom of Prussia
- Russian Empire
- Kingdom of Sardinia

States of the Church (or Papal States)

- Switzerland
- Duchy of Tuscany
- Venetia

Locate the following cities :

- Brussels
- Cracow
- Dresden
- Frankfort
- Genoa
- Leipsic
- Paris
- Posen

- Rome
- Venice
- Vienna
- Warsaw

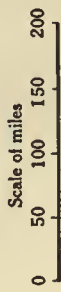
Assignment II. On the printed outline map indicate the boundaries of the German Confederation and locate the following parts of the Confederation :

- Austria
- Baden
- Bavaria
- Bohemia
- Hanover
- Holstein

- Mecklenberg
- Prussia
- Saxony

NOTE. In 1830 Belgium, because of political and religious differences with Holland, revolted from the Kingdom of the Netherlands and became an independent state. At that time it included within its boundaries most of the present Grand Duchy of Luxemburg. In 1839 the boundaries were again changed by the division between Belgium and Holland of Limburg and Luxemburg. These are the boundaries as shown in Map XIII.

CENTRAL EUROPE AFTER
THE CONGRESS OF VIENNA (1815)



LESSON IX

GERMANY AFTER 1871

Assignment I. Locate the following states of the German Empire:

Kingdom of
Bavaria
Prussia
Saxony
Württemberg

Grand Duchy of
Baden
Hesse
Mecklenburg-Schwerin
Mecklenburg-Strelitz
Oldenburg

Duchy of
Anhalt
Brunswick

Principality of
Lippe
Schaumburg-Lippe
Waldeck

Free town of
Lübeck
Bremen
Hamburg

Imperial territory of
Alsace-Lorraine

Sketch in rough outline the position of the Thuringian States, indicating by figures the eight states.

1. Grand Duchy of Saxe-Weimar
2. Duchy of Saxe-Meiningen
3. Duchy of Saxe-Altenburg
4. Duchy of Saxe-Coburg-Gotha
5. Principality of Schwarzburg-Sondershausen
6. Principality of Schwarzburg-Rudolstadt
7. Principality of Reuss, elder line

8. Principality of Reuss, junior line

Assignment II. On the tracing sheet used for Assignment I locate the following cities:

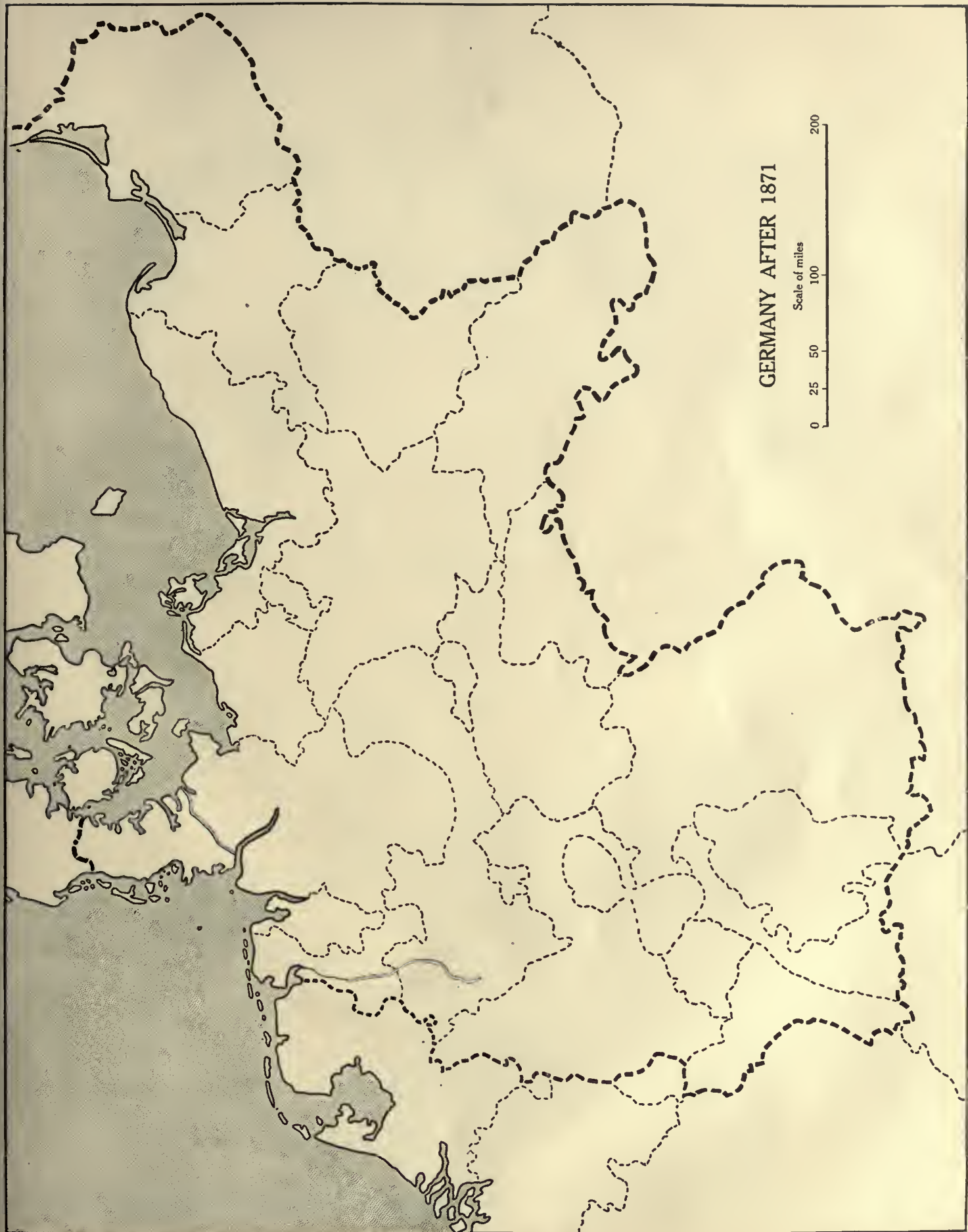
Aachen (Aix-la-Chapelle)
Berlin
Bremen
Breslau
Coblenz
Danzig
Dresden
Essen
Frankfort
Hamburg
Hanover
Kiel
Königsberg
Leipzig
Lübeck
Metz

Munich
Potsdam
Strassburg
Stuttgart

Locate the Kiel (or Kaiser Wilhelm) Canal.

Assignment III. On the printed outline map indicate with colored crayons or other device the extent of Prussia.

- In 1713, after the Treaty of Utrecht
In 1786, after the death of Frederick the Great
In 1795, after the partitions of Poland
In 1815, after the Congress of Vienna
In 1871, after the establishment of the German Empire



GERMANY AFTER 1871

Scale of miles
0 25 50 100 200

LESSON X

EUROPEAN POSSESSIONS IN AFRICA (1914)

Assignment I. Locate the following possessions and protectorates of England:

Anglo-Egyptian Sudan
 Bechuanaland
 British Somaliland
 British East Africa
 Egypt
 Gambia
 Gold Coast Colony (Ashanti)
 Northern Nigeria
 Nyasaland
 Sierra Leone
 Uganda
 Union of South Africa
 Walfisch Bay

Locate the following possessions and protectorates of Germany:

German East Africa
 German Southwest Africa
 Kamerun
 Togoland

Locate the following possessions and protectorates of France:

Algeria
 Dahomey
 French Equatorial Africa
 French Guinea
 French Somali Coast
 Ivory Coast Colony
 Madagascar
 Morocco
 Senegal
 Tunis

Locate the following possessions and protectorates of Italy:

Eritrea
 Italian Somaliland
 Tripoli

Locate the following possessions and protectorates of Portugal:

Portuguese East Africa
 Portuguese West Africa (or Angola)
 Portuguese Guinea

Locate the following possessions and protectorates of Spain:

Rio de Oro (or Spanish Territory)
 Spanish Guinea (or Muni)
 Tangiers

Locate the following possession of Belgium:

Kongo

Territories not under European control:

Liberia
 Abyssinia

Assignment II. On the tracing sheet used for Assignment I locate the following cities:

Alexandria
 Algiers
 Assouan
 Cairo
 Cape Town
 Fashoda

Johannesburg
 Khartum

Kimberley
 Morocco
 Mozambique

Port Said

Pretoria

Tripoli

Tunis

Zanzibar

Locate the following rivers:

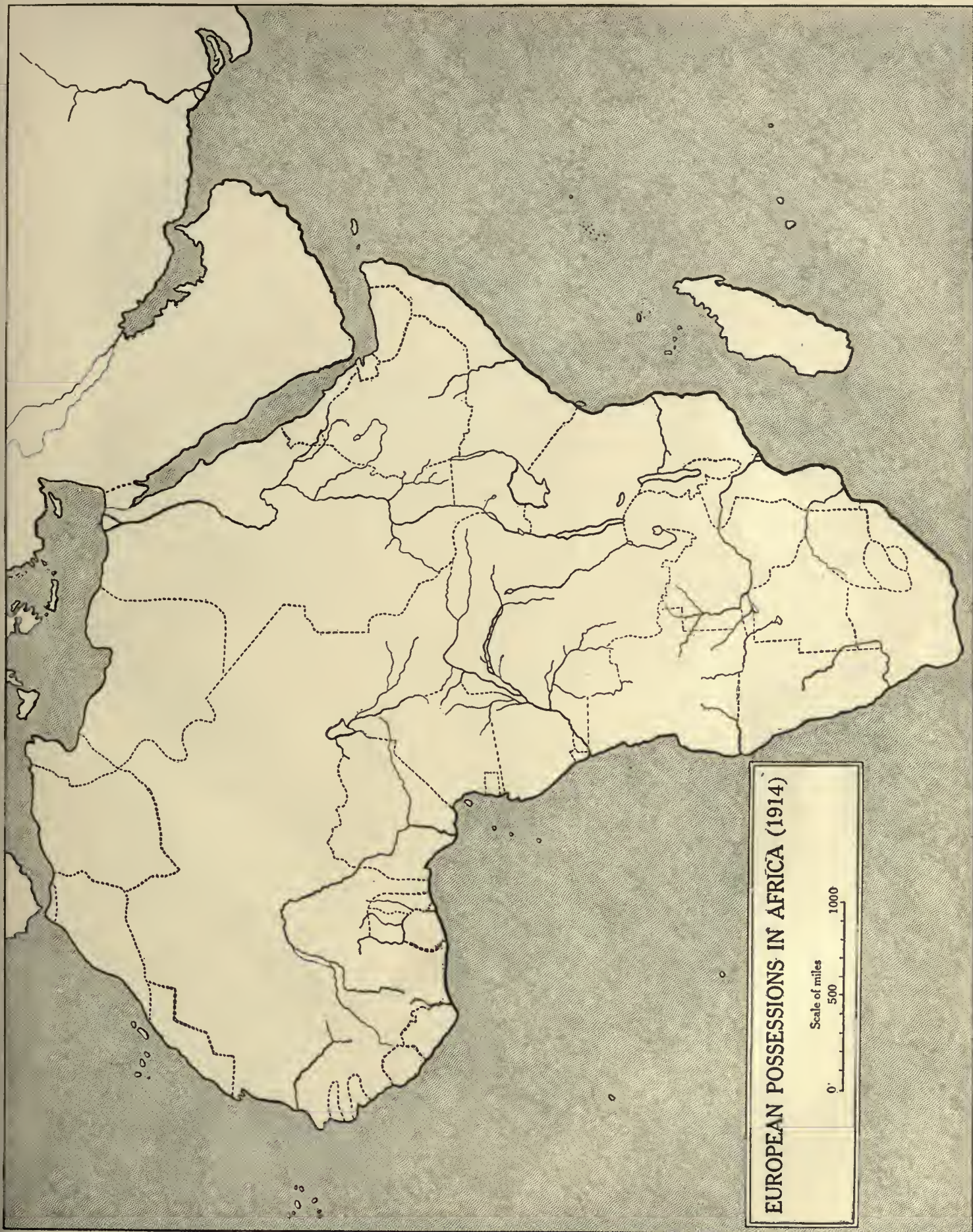
Kongo
 Niger
 Nile

Orange

Vaal

Zambezi

Assignment III. On the printed outline map show Germany's colonies in 1914 and indicate to what countries they were given by the terms of the peace treaty of 1919.



EUROPEAN POSSESSIONS IN AFRICA (1914)

Scale of miles
0 500 1000

LESSON XI

THE WAR AREA OF THE WESTERN FRONT (1914-1918)

Assignment I. Locate the following
Departments of Eastern France :

Aisne
Ardennes
Haute Marne
Haute Saône
Marne
Meurthe-et-Moselle
Meuse
Nord
Oise
Pas de Calais
Somme
Vosges

Locate the following members of the
German Empire :

Alsace
Lorraine
Palatinate
Rhine Province

Locate Luxemburg

Assignment II. On the tracing sheet
used for Assignment I locate the follow-
ing rivers :

Garonne
Loire
Marne
Meuse
Moselle
Po
Rhine
Rhône

Seine
Somme

Locate the following bodies of water :

Bay of Biscay
North Sea
Strait of Dover
English Channel
Zuider Zee

Locate Helgoland

Assignment III. On the printed outline
map locate the following cities and towns :

Aachen
Amiens
Antwerp
Belleau Wood
Bern
Bordeaux
Boulogne
Brest
Brussels
Calais
Cambrai
Cantigny
Château-Thierry
Chaumont
Coblenz
Cologne
Compiègne
Cuxhaven
Dover
Dunkirk
Geneva
Ghent

The Hague
Havre
La Fère
Lens
Laon
Liège
Lille
London
Louvain
Mainz
Mannheim
Marseilles
Meaux
Metz
Mons
Montdidier
Namur
Nancy
Ostend
Paris
Peronne
Portsmouth
Reims (Rheims)
Rouen
St. Mihiel
St. Quentin
Sedan
Seicheprey
Soissons
Southampton
Strassburg
Toul
Verdun
Waterloo
Ypres



THE WAR AREA
OF THE WESTERN FRONT (1914-1918)

Scale of miles
0 25 50 100 200

LESSON XII

EUROPE BEFORE THE WORLD WAR (1914)

Assignment I. Locate the following :

Albania
Austria-Hungary
Belgium
Bulgaria
Denmark
England
France
German Empire
Greece
Holland
Ireland
Italy
Luxemburg
Montenegro
Norway
Portugal
Roumania
Russia, showing Crimea, Finland, Lapland, Poland
Scotland
Servia
Spain

Sweden
Switzerland
Turkey
Wales

Assignment II. On the tracing sheet used for Assignment I locate the following islands :

Corsica
Crete
Cyprus
Iceland
Sardinia
Sicily

Caspian Sea
Cattgat
Dardanelles
English Channel
Gulf of Finland
Irish Sea
North Sea
Sea of Azov
Skager Rack
Strait of Dover
Strait of Gibraltar
Strait of Messina
White Sea

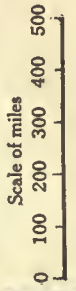
Assignment III. On the printed outline map locate the following cities :

Adriatic Sea
Ægean Sea
Arctic Ocean
Baltic Sea
Bay of Biscay
Black Sea
Bosporus

Cettinje (Cetigne)
Constantinople
Durazzo
Erzeroum
Geneva
Hamburg
Havre
Liverpool
London
Madrid
Marseilles
Moscow
Odessa
Paris
St. Petersburg
Riga
Rome
Saloniki (Salonica)
Sofia
Stockholm
The Hague
Trieste
Vienna
Warsaw



EUROPE BEFORE THE WORLD WAR (1914)



LESSON XIII

THE BALKAN STATES BEFORE THE WORLD WAR (1914)

Assignment I. Indicate the following political divisions :

- Albania
- Austria
 - a.* Bohemia
 - b.* Moravia
- Bulgaria
- Greece
- Hungary
 - a.* Bosnia
 - b.* Croatia

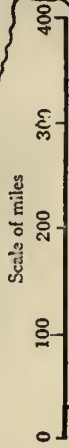
Locate the following cities :

- c.* Dalmatia
- d.* Herzegovina
- e.* Galicia
- f.* Transylvania
- Montenegro
- Ottoman Empire (Turkey)
- Roumania
- Russia
 - a.* Bessarabia
 - b.* Crimea
- Servia

Assignment II. Indicate on the printed outline map the boundaries, in 1907, before the Balkan wars, of

- Bulgaria
- Dalmatia
- Eastern Roumelia
- Greece
- Montenegro
- Ottoman Empire (Turkey)
- Roumania
- Servia

**THE BALKAN STATES
BEFORE THE WORLD WAR (1914)**



LESSON XIV

EUROPE AFTER THE WORLD WAR (1919)

Assignment. Trace the map on the opposite page, including the shaded and the specially marked areas. Omit the numbers and letters. Fill in the names of the countries according to the numbers given in the list below. Where there is not room to print the name, use the number, but learn the name of the country which it represents.

The letters in small circles on the printed map need not be included in the traced map, but the areas represented by them should be studied on the map and in the key.

Compare this map with that in Lesson XII and observe carefully the changes in boundaries.

The Allies :

1. Albania
2. Belgium
3. British Isles
4. France
5. Greece
6. Italy
7. Portugal

8. Roumania
9. Russia

The Central Powers :

10. Austria
11. Bulgaria
12. Germany
13. Hungary
31. Turkey

Neutral countries :

14. Denmark
15. Luxembourg
16. Netherlands
17. Norway
18. Spain
19. Sweden
20. Switzerland

New countries :

21. Czechoslovakia
22. Esthonia
23. Finland
24. Jugoslavia
25. Latvia
26. Lithuania
27. Poland
28. Ukraine
29. Georgia
30. Azerbaijan.

NOTE. See page 32 for a list of the participants in the World War.

KEY



Parts of the territory ceded by the Central Powers.



Plebiscites (sovereignty to be determined by popular vote).



Internationalized areas.



Present settled boundary lines.
Unsettled boundary lines.

a. Ceded to Belgium by Germany : Eupen, Malmedy, and Moresnet.

b. Ceded to France by Germany : Alsace-Lorraine.

c. Free city of Danzig, surrounded by internationalized area.

d. The Memel area.

f. Upper Silesian or Oppeln Plebiscite (Polish or German control).

g. Sarre Basin. Control by League of Nations for fifteen years from 1919, after which it becomes a plebiscite.

h. Ceded to Italy by Austria : Trentino.

i. Klagenfurt Plebiscite (to Jugoslavia or Austria).

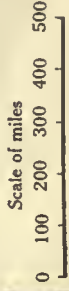
k. Ceded to Poland by Germany : portions of Pomerania, Posen, East Prussia, and West Prussia.

m. Zone Straits

NOTE. It may be impossible for several changes to show accurately the territorial changes in Europe resulting from the World War. The map on the opposite page shows as nearly as possible at this time the changes laid out definitely and tentatively by the Peace Conference and by negotiated and pending treaties. Many boundaries are still in dispute. Italy and Jugoslavia are contending for parts of the Adriatic coast. Bulgaria desires a strip of the North Aegean coast. Various other Balkan boundaries, the divisions of the Baltic States, and the limits of Ukraine may remain unsettled for a long time.

The chief defect of most of the maps of the New Europe has been that they attempt to show too much, thereby resulting in confusion. A careful study of the simplified map on the opposite page will give a clear idea of the definite changes caused by the war, and offer a very helpful, although necessarily approximate, conception of the territorial alterations which have not yet been definitely determined.

EUROPE AFTER THE WORLD WAR (1920)



The following is a list of all the countries that became involved in the World War, together with the year in which they entered the conflict.

1914

The Allies :

France (gained territory and colonies)
Russia (became several separate countries)
British Empire (gained colonies)
Belgium (gained territory)
Serbia (became a part of Jugoslavia)

Montenegro (became a part of Jugoslavia)
Japan (gained territory)

The Central Powers :

Germany (lost territory and colonies)
Austria (lost territory and colonies)
Hungary (lost territory and colonies)
Turkey (lost territory and colonies)

1915

The Allies :

Italy (gained territory)

San Marino

The Central Powers :

Bulgaria (lost territory)

1916

The Allies :

Portugal
Roumania (gained territory)

1917

The Allies :

United States
Cuba
Panama
Greece (gained territory)

Siam
Liberia
China
Brazil
Bolivia
Guatemala
Honduras
Haiti
Nicaragua
Santo Domingo
Chile
Costa Rica
Peru
Uruguay
Ecuador

THIS BOOK IS DUE ON THE LAST DATE
STAMPED BELOW

AN INITIAL FINE OF 25 CENTS
WILL BE ASSESSED FOR FAILURE TO RETURN
THIS BOOK ON THE DATE DUE. THE PENALTY
WILL INCREASE TO 50 CENTS ON THE FOURTH
DAY AND TO \$1.00 ON THE SEVENTH DAY
OVERDUE.

SEP 11 1932

FEB 14 1933

LD 21-20m-6, '32

