

D  
21  
.5  
B5

UC-NRLF



5C 15 578

# PRACTICAL MAP EXERCISES IN MEDIEVAL AND MODERN EUROPEAN HISTORY

BY

MILDRED C. BISHOP

AND

EDWARD K. ROBINSON



YE 05388

GINN AND COMPANY

BOSTON • NEW YORK • CHICAGO • LONDON  
ATLANTA • DALLAS • COLUMBUS • SAN FRANCISCO



Digitized by the Internet Archive  
in 2007 with funding from  
Microsoft Corporation



## PREFACE

The purpose of these map studies is to fix more firmly in the mind of the student the more important geographic and political features that have influenced the history of the various countries of Europe. The importance of knowing accurately the location of places is being more universally recognized by history teachers every year. There is no more effective or quicker method of gaining that knowledge than by careful work in map studies.

Every good history today is supplied with excellent maps, but it has been repeatedly proved that too often a hasty reference to these maps results only in a confused general idea of the territory studied. Every textbook map must necessarily contain very many more features than the student is interested in at any one time. The result is that he carries away from the map a vague idea of boundaries, of the location of many cities, or of the direction of a specific trade route. But if that same student, after outlining the continent, inserts those boundaries himself, marks in the cities, or traces the trade route, he really learns their locations; they have become a part of his own background of history.

These map studies have been prepared to meet the requirements of the several texts which begin

with the reign of Charlemagne; if the class is using a text that begins with the events that followed the Thirty Years' War, Maps I, III, and IV, and the first assignment of Map II, may be omitted at the discretion of the teacher.

The extra tracing sheets make possible any additional exercises that the individual teacher may wish to have the students undertake. It has been the purpose of the authors in preparing this manual to allow for a wide range of initiative by the teacher. In courses which emphasize commercial or industrial history the students may add to their traced maps geographic or commercial features.

The flexibility of such a series of map studies as this should be kept constantly in mind. All the greater changes in the map of Europe during the past thousand years are covered by the material in this manual, but the teacher should not hesitate to adapt it to the particular needs of his own special courses.

The authors desire to express their gratitude to Mrs. Helen K. Thomas for her valuable suggestions in the construction of the map of Europe after the World War.

THE AUTHORS

438143

# LESSON I

## EUROPE IN THE TIME OF CHARLEMAGNE (814)

**Assignment I.** Locate the following divisions of the original possessions of Charlemagne:

Aquitania  
Austrasia  
Bavaria  
Britannia  
Burgundy  
Neustria

Locate the following countries conquered by Charlemagne and added to his territories:

Bohemia  
Corsica  
Italy  
Lombardy

Saxony  
The Spanish Marches

Locate the neighboring kingdoms:

Caliphate of Bagdad  
Duchy of Beneventum  
Eastern Empire  
Emirate of Cordova

Locate the following important cities of Charlemagne's time:

Aix-la-Chapelle  
Athens  
Bremen  
Constantinople  
Cordova  
Granada  
Hamburg  
Naples

Seville  
Rome  
Venice

Locate the following rivers:

Danube  
Ebro  
Elbe  
Garonne  
Loire  
Po  
Rhine  
Rhone

a. Western Frankish Kingdom  
b. Eastern Frankish Kingdom  
c. Kingdom of Italy

Locate Mersen, where the treaty of division was drawn up.

**Assignment III.** On the printed outline map previously used for tracing indicate (with colored crayons or other device)

The territory inherited by Charlemagne

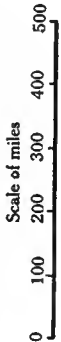
The territory conquered by Charlemagne

The territory over which his coronation by the Pope gave him a nominal authority

**Assignment II.** On a new sheet of tracing paper indicate the boundaries of the three parts into which the Empire was divided after the death of Charlemagne.



**EUROPE IN THE TIME  
OF CHARLEMAGNE (814)**





## LESSON II

### THE BRITISH ISLES

**NOTE.** The assignments on this map may be given at such times as the student has studied the particular phase of English history necessary to the work.

**Assignment I.** Locate London and Chester, and indicate the Kingdom of Wessex (England in the time of Alfred the Great, 878).

Locate the mouth of the River Tweed and Solway Firth, and indicate England of the Plantagenets (after Henry II, 1154).

Indicate the England of Edward I, who annexed Wales.

**Assignment II.** On a new sheet of tracing paper indicate the four divisions of the present Kingdom of Great Britain and Ireland.

Locate the following cities:

Aberdeen  
Bristol  
Canterbury  
Chester  
Cork  
Dublin  
Edinburgh  
Exeter  
Galway  
Glasgow  
Hastings  
Liverpool  
London  
Oxford  
Salisbury  
York

Locate the following islands:

Anglesey  
Hebrides  
Man  
Orkney  
Shetland  
Skye  
Wight

**Assignment III.** On the printed outline map locate the following counties of England:

**NOTE.** This assignment should be completed by placing the numbers of the counties on the map.

1. Bedford  
2. Berkshire  
3. Buckingham  
4. Cambridge  
5. Cheshire  
6. Cornwall  
7. Cumberland  
8. Derby  
9. Devon  
10. Dorset  
11. Durham  
12. Essex  
13. Gloucester  
14. Hampshire  
15. Hereford  
16. Hertford  
17. Huntingdon  
18. Kent  
19. Lancashire  
20. Leicester  
21. Lincoln  
22. Middlesex  
23. Monmouth  
24. Norfolk

25. Northampton  
26. Northumberland  
27. Nottingham  
28. Oxford  
29. Rutland  
30. Shropshire  
31. Somerset  
32. Stafford  
33. Suffolk  
34. Surrey  
35. Sussex  
36. Warwick  
37. Westmorland  
38. Wiltshire  
39. Worcester  
40. York

In the same manner locate the following counties of Wales:

1. Anglesey  
2. Brecknock  
3. Cardigan  
4. Carmarthen  
5. Carnarvon  
6. Denbigh  
7. Flint  
8. Glamorgan  
9. Merioneth  
10. Montgomery  
11. Pembroke  
12. Radnor

In the same manner locate the following provinces of Ireland:

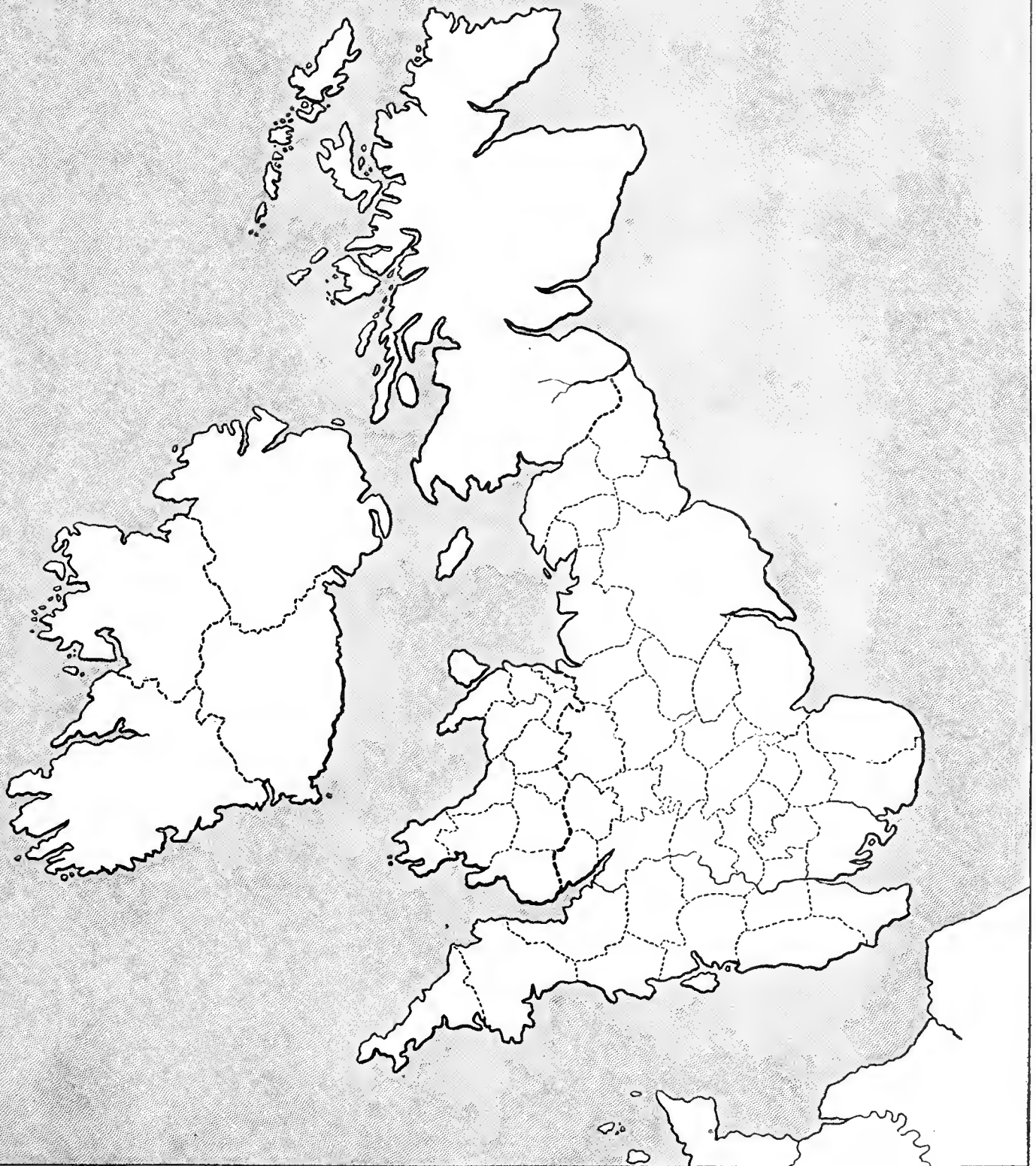
1. Connaught  
2. Leinster  
3. Munster  
4. Ulster



# THE BRITISH ISLES

Scale of miles

0 25 50 100 200



# LESSON III

## EUROPE ABOUT A.D. 1000

**Assignment I.** Locate the following political divisions:

Anglo-Saxon Kingdom  
Bulgaria  
Burgundian Kingdom  
Castile  
Caliphate of Cordova  
\* Croatia  
Eastern Empire  
France  
Hungary  
Ireland  
Leon  
Lithuania  
Navarre  
Duchy of Poland

Prussia  
Russia  
Scotland  
Servia  
Wales  
Western Roman Empire (or Holy Roman Empire)

Locate the following cities of that period:

Albi  
Augsburg  
Avignon  
Bordeaux  
Canossa  
Clermont  
Florence

London  
Marscilles  
Milan  
Naples  
Orleans  
Oxford  
Paris  
Rome  
Venice  
Verona  
York

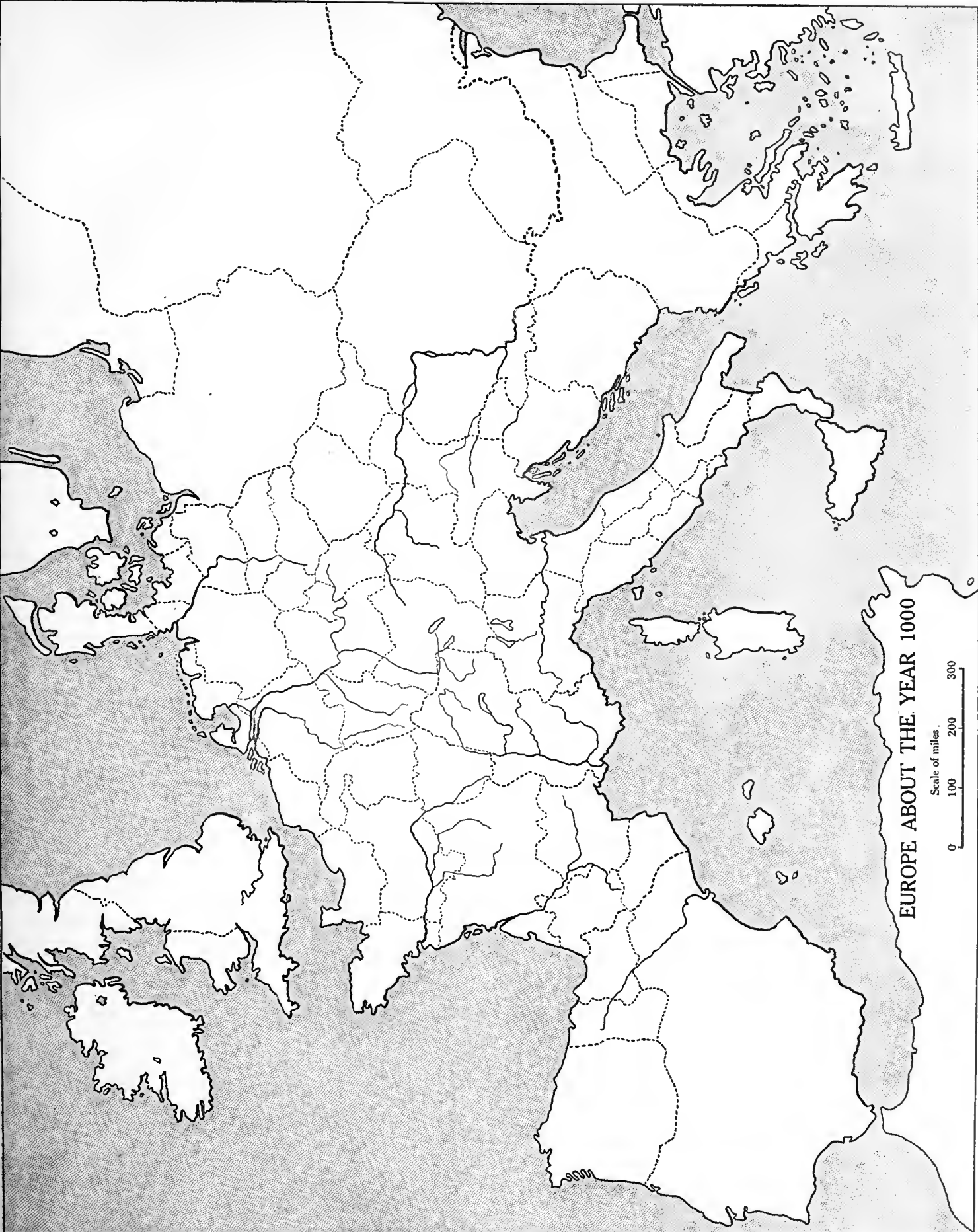
Duchy of Burgundy  
County of Flanders  
Duchy of Gascony  
Duchy of Normandy

Indicate the following divisions in the Western Roman Empire:

Duchy of Alemanni  
Mark of Austria  
Duchy of Bavaria  
Duchy of Bohemia  
Lombardy  
Mark of Moravia  
Duchy of Saxony  
Tuscany  
Mark of Verona

**Assignment II.** On the printed outline map indicate the following divisions in France:

Duchy of Aquitaine  
Duchy of Brittany



**EUROPE ABOUT THE YEAR 1000**

Scale of miles.  
0 100 200 300

COMMERCIAL TOWNS AND TRADE ROUTES (13TH AND 14TH CENTURIES)

**Assignment I.** Locate the following seaports of the Venetian Water Routes:

- Alexandria
- Beyrout
- Boulogne
- Canea
- Corfu
- Jaffa
- Lisbon
- Naples
- Southampton
- Syracuse
- Venice

- Bergen
- Danzig
- Hamburg
- Lübeck
- Riga
- Stettin
- Stockholm

Locate the following seaports common to more than one route:

- Bruges
- Constantinople
- London
- Messina

Locate the following seaports of the Genoese Water Routes:

- Amisus
- Caffa
- Genoa
- Tana
- Trapezus (Trebizond)
- Tunis

**Assignment II.** On the tracing sheet used for Assignment I locate the following cities and towns of the inland trade routes:

- Antwerp
- Barcelona

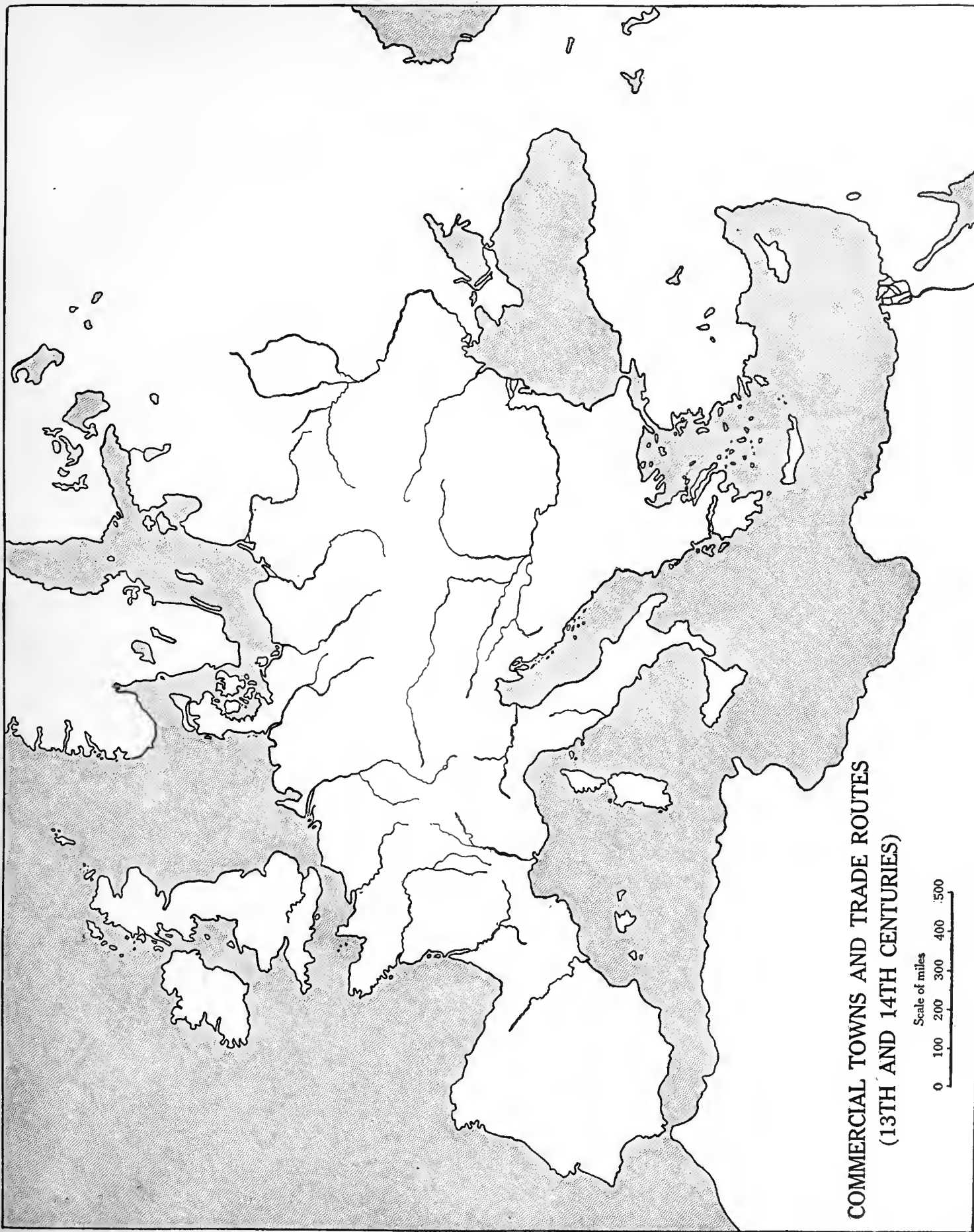
- Bologna
- Bordeaux
- Boulogne
- Bremen
- Cologne
- Florence
- Ghent
- Leipzig
- Marseilles
- Milan
- Novgorod
- Nuremberg
- Paris
- Rome
- Stettin
- Strasbourg
- Tana
- Vienna

- Venice to England and the Netherlands (- - - - -)
- Venice to Egypt and the Eastern Mediterranean seaports (- - - - -)
- Genoa to Northern Africa (+ + + + +)
- Genoa to the Black Sea ports (+ + + + +)
- Hamburg to England and the Netherlands (O - O - O -)
- Hamburg to Norway and Iceland (O - O - O -)
- Hamburg to the Baltic Sea ports (O - O - O -)

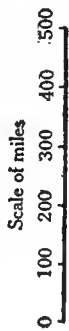
Draw with solid lines the following land routes:

- Hamburg through Central Europe to Venice, Barcelona, and Bordeaux
- Hamburg to Constantinople and the East
- Stettin into Russia

**Assignment III.** On the printed outline map draw, with different colored crayons or with different kinds of lines as indicated, the following water routes. Locate the necessary cities.



**COMMERCIAL TOWNS AND TRADE ROUTES  
(13TH AND 14TH CENTURIES)**



# LESSON V

## EUROPE AFTER THE TREATIES OF UTRECHT AND RASTADT (1713-1714)

**Assignment I.** Locate the following political divisions of Europe :

Kingdom of Denmark and Norway

The Holy Roman Empire

Kingdom of France

Republic of Genoa

Kingdom of Great Britain and Ireland

Kingdom of Hungary

Duchy of Milan

Duchy of Modena

Naples

Netherlands

Ottoman Dominions

Duchy of Parma

Piedmont

Kingdom of Portugal

Sardinia

Sicily

Kingdom of Spain

Kingdom of Sweden

States of the Church

Switzerland

Transylvania

Duchy of Tuscany

Republic of Venice

Locate the following cities :

Amsterdam

Berlin

Edinburgh

Genoa

Gibraltar

London

Naples

Paris

Rastadt

Rome

Utrecht

Venice

Vienna

**Assignment II.** On the printed outline map locate the following divisions of the Holy Roman Empire :

Alsace

Austria

Austrian Netherlands

Bavaria

Bohemia

Lorraine

Moravia

Pomerania

Prussia

Sardinia

Saxony

Silesia

Tyrol

Indicate also the territory acquired by Austria.

Spanish Netherlands

Naples

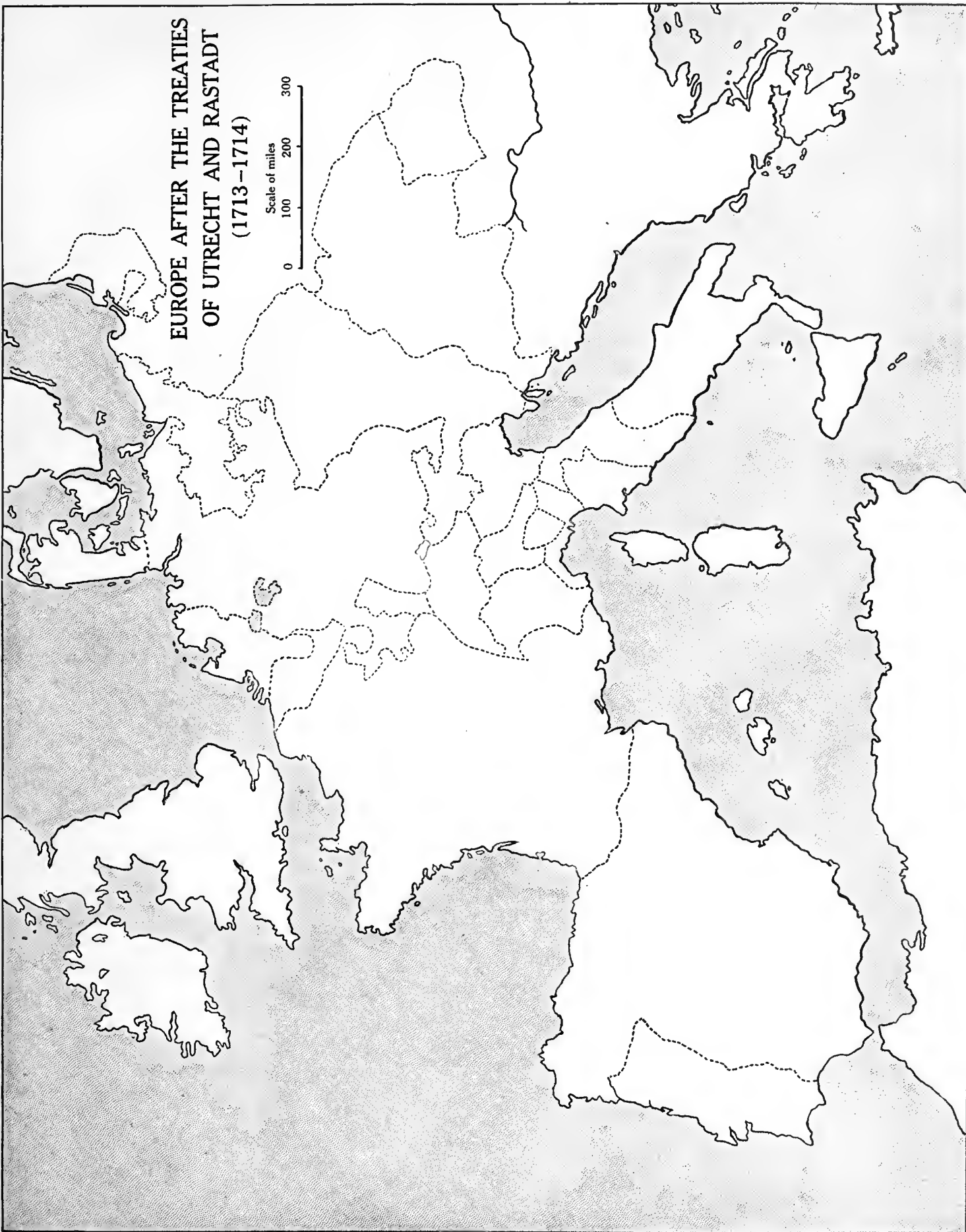
Milan

Indicate the territory acquired by England.

Gibraltar

**EUROPE AFTER THE TREATIES  
OF UTRECHT AND RASTADT  
(1713-1714)**

Scale of miles  
0 100 200 300



# LESSON VI

## THE PARTITIONS OF POLAND

**Assignment I.** The First Partition, 1772. Indicate the territory acquired by

Austria  
Prussia  
Russia

Locate the cities

Lemberg  
Marienburg

The Second Partition, 1793. Indicate the territory acquired by

Prussia  
Russia

Locate the following cities :

Gnesen  
Danzig  
Kiev  
Posen  
Thorn

The Third Partition. Indicate the territory acquired by

Austria  
Prussia  
Russia

Locate the following cities :

Cracow  
Lublin  
Vilna  
Warsaw

**Assignment II.** On the printed outline map indicate the following sections of Poland :

Black Russia  
Curland (or Courland)  
Galicia  
Lithuania  
Little Russia  
Ludomeria  
White Russia

Indicate the neighboring territories of

Austria  
East Prussia  
Hungary  
Moldavia  
Pomerania  
Russia  
Silesia  
Sweden

Locate the following bodies of water :

Baltic Sea  
Black Sea  
Gulf of Riga

Locate the following cities :

Breslau  
Buda-Pest  
Riga  
St. Petersburg  
Vienna





**THE PARTITIONS OF POLAND**

Scale of miles  
0 50 100 200

# LESSON VII

## EUROPE AT THE TIME OF NAPOLEON'S GREATEST POWER (1810)

**Assignment I.** Indicate the following countries :

- a. The Empire of France
- b. Its Dependencies
  - Kingdom of Spain
  - Kingdom of Italy
  - Kingdom of Naples
  - Helvetic Republic (Switzerland)
  - Confederation of the Rhine
  - Grand Duchy of Warsaw
  - Illyrian Provinces
- c. Kingdom of Denmark
- Kingdom of Prussia
- Kingdom of Portugal
- Kingdom of Sweden

- Kingdom of Sardinia
- Kingdom of Sicily
- Kingdom of Great Britain and Ireland
- Empire of Russia
- Empire of Austria
- Turkish Empire

**Assignment II.** On the tracing sheet used for Assignment I locate these European cities that figured in Napoleon's career :

- Austerlitz
- Boulogne
- Borodino
- Dresden

- Friedland
- Jena
- Leipzig
- Madrid
- Milan
- Moscow
- Naples
- Paris
- Tilsit
- Toulon
- Venice
- Vienna
- Wagram
- Waterloo

**Assignment III.** On the printed outline map indicate

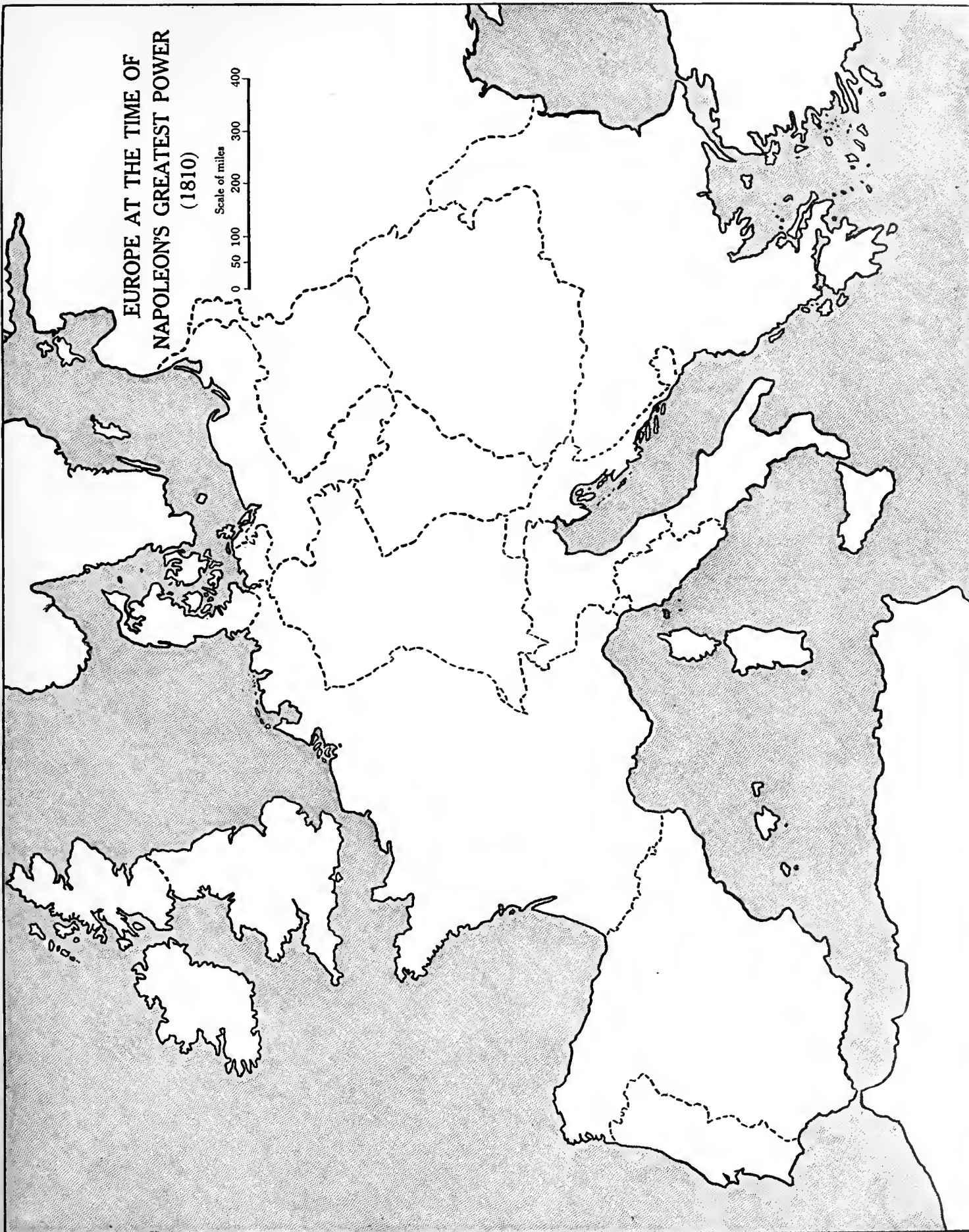
- a. The French Republic when Napoleon first came into prominence
- b. The extent of the French Empire when Napoleon was at the height of his power
- c. The boundaries of France after the fall of Napoleon

**NOTE.** The above will be done from reading the text rather than from study of any particular map. It will be easiest accomplished by the use of different-colored or differently formed lines.

Locate the isle of Elba.

EUROPE AT THE TIME OF  
NAPOLEON'S GREATEST POWER  
(1810)

Scale of miles  
0 50 100 200 300 400



# LESSON VIII

## CENTRAL EUROPE AFTER THE CONGRESS OF VIENNA (1815)

**Assignment I.** Locate the following political divisions :

Austrian Empire  
 Kingdom of Denmark  
 German Confederation  
 Lombardy  
 Duchy of Modena  
 Kingdom of Naples (or The Two Sicilies)  
 Kingdom of the Netherlands  
 Ottoman Empire (or Turkey)  
 Kingdom of Prussia  
 Russian Empire  
 Kingdom of Sardinia

States of the Church (or Papal States)  
 Switzerland  
 Duchy of Tuscany  
 Venetia

Locate the following cities :

Brussels  
 Cracow  
 Dresden  
 Frankfurt  
 Genoa  
 Leipsic  
 Paris  
 Posen

Rome  
 Venice  
 Vienna  
 Warsaw

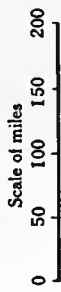
Mecklenberg  
 Prussia  
 Saxony

**Assignment II.** On the printed outline map indicate the boundaries of the German Confederation and locate the following parts of the Confederation :

Austria  
 Baden  
 Bavaria  
 Bohemia  
 Hanover  
 Holstein

**NOTE.** In 1830 Belgium, because of political and religious differences with Holland, revolted from the Kingdom of the Netherlands and became an independent state. At that time it included within its boundaries most of the present Grand Duchy of Luxemburg. In 1839 the boundaries were again changed by the division between Belgium and Holland of Limburg and Luxemburg. These are the boundaries as shown in Map XIII.

CENTRAL EUROPE AFTER  
THE CONGRESS OF VIENNA (1815)



# LESSON IX

## GERMANY AFTER 1871

**Assignment I.** Locate the following states of the German Empire:

Kingdom of  
Bavaria  
Prussia  
Saxony  
Württemberg

Grand Duchy of  
Baden  
Hesse  
Mecklenburg-Schwerin  
Mecklenburg-Strelitz  
Oldenburg

Duchy of  
Anhalt  
Brunswick

Principality of  
Lippe  
Schaumburg-Lippe  
Waldeck

Free town of  
Lübeck  
Bremen  
Hamburg  
Imperial territory of  
Alsace-Lorraine

Sketch in rough outline the position of the Thuringian States, indicating by figures the eight states.

1. Grand Duchy of Saxe-Weimar
2. Duchy of Saxe-Meiningen
3. Duchy of Saxe-Altenburg
4. Duchy of Saxe-Coburg-Gotha
5. Principality of Schwarzburg-Sondershausen
6. Principality of Schwarzburg-Rudolstadt
7. Principality of Reuss, elder line

8. Principality of Reuss, junior line

**Assignment II.** On the tracing sheet used for Assignment I locate the following cities:

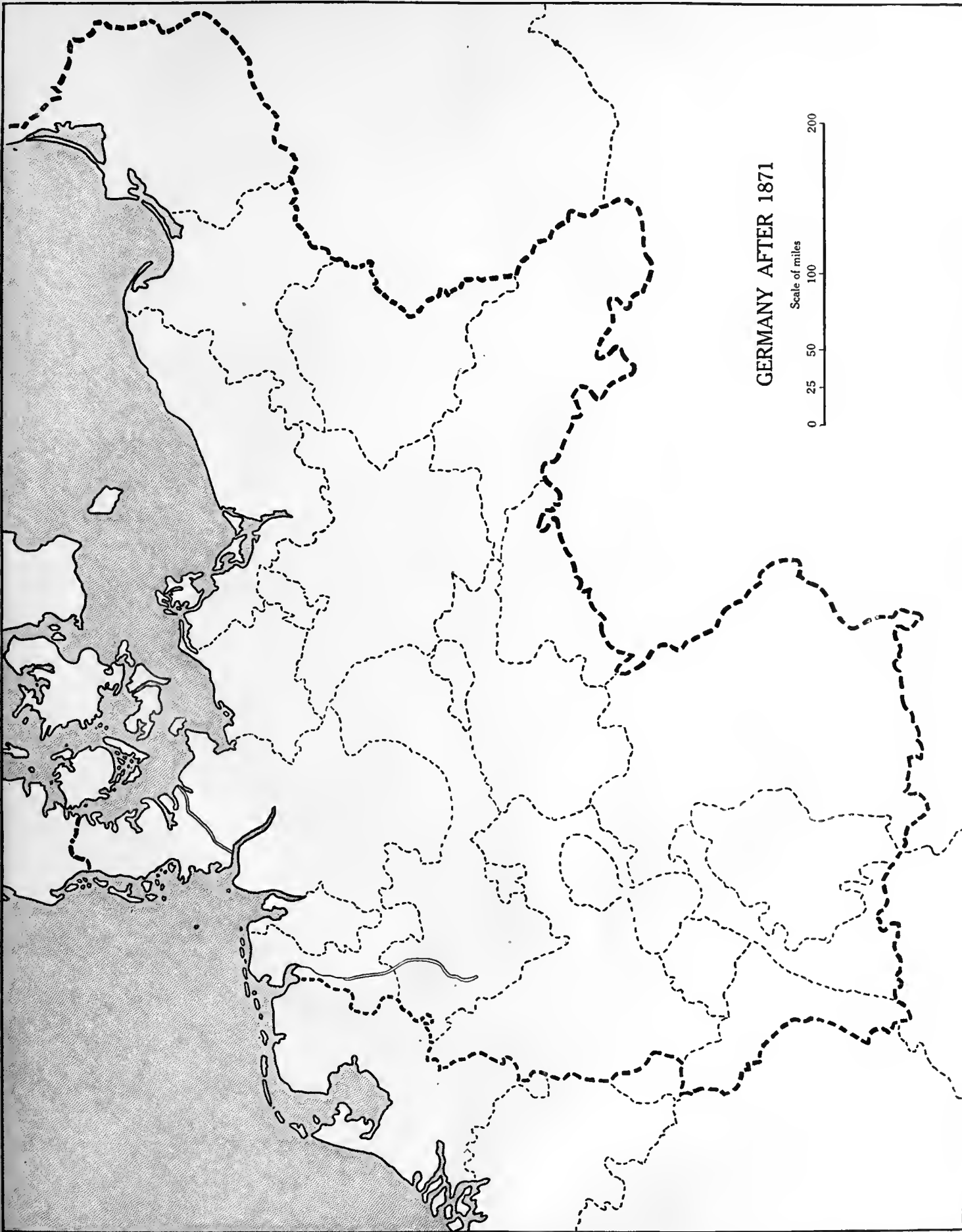
Aachen (Aix-la-Chapelle)  
Berlin  
Bremen  
Breslau  
Coblenz  
Danzig  
Dresden  
Essen  
Frankfort  
Hamburg  
Hanover  
Kiel  
Königsberg  
Leipzig  
Lübeck  
Metz

Munich  
Potsdam  
Strassburg  
Stuttgart

Locate the Kiel (or Kaiser Wilhelm) Canal.

**Assignment III.** On the printed outline map indicate with colored crayons or other device the extent of Prussia.

In 1713, after the Treaty of Utrecht  
In 1786, after the death of Frederick the Great  
In 1795, after the partitions of Poland  
In 1815, after the Congress of Vienna  
In 1871, after the establishment of the German Empire



GERMANY AFTER 1871

Scale of miles  
0 25 50 100 200

# LESSON X

## EUROPEAN POSSESSIONS IN AFRICA (1914)

**Assignment I.** Locate the following possessions and protectorates of England:

Anglo-Egyptian Sudan  
 Bechuanaland  
 British Somaliland  
 British East Africa  
 Egypt  
 Gambia  
 Gold Coast Colony (Ashanti)  
 Northern Nigeria  
 Nyasaland  
 Sierra Leone  
 Uganda  
 Union of South Africa  
 Walfisch Bay

Locate the following possessions and protectorates of Germany:

German East Africa  
 German Southwest Africa  
 Kamerun  
 Togoland

Locate the following possessions and protectorates of France:

Algeria  
 Dahomey  
 French Equatorial Africa  
 French Guinea  
 French Somali Coast  
 Ivory Coast Colony  
 Madagascar  
 Morocco  
 Senegal  
 Tunis

Locate the following possessions and protectorates of Italy:

Eritrea  
 Italian Somaliland  
 Tripoli

Locate the following possessions and protectorates of Portugal:

Portuguese East Africa  
 Portuguese West Africa (or Angola)  
 Portuguese Guinea

Locate the following possessions and protectorates of Spain:

Rio de Oro (or Spanish Territory)  
 Spanish Guinea (or Muni)  
 Tangiers

Locate the following possession of Belgium:

Kongo

Territories not under European control:

Liberia  
 Abyssinia

**Assignment II.** On the tracing sheet used for Assignment I locate the following cities:

Alexandria  
 Algiers  
 Assouan  
 Cairo  
 Cape Town  
 Fashoda

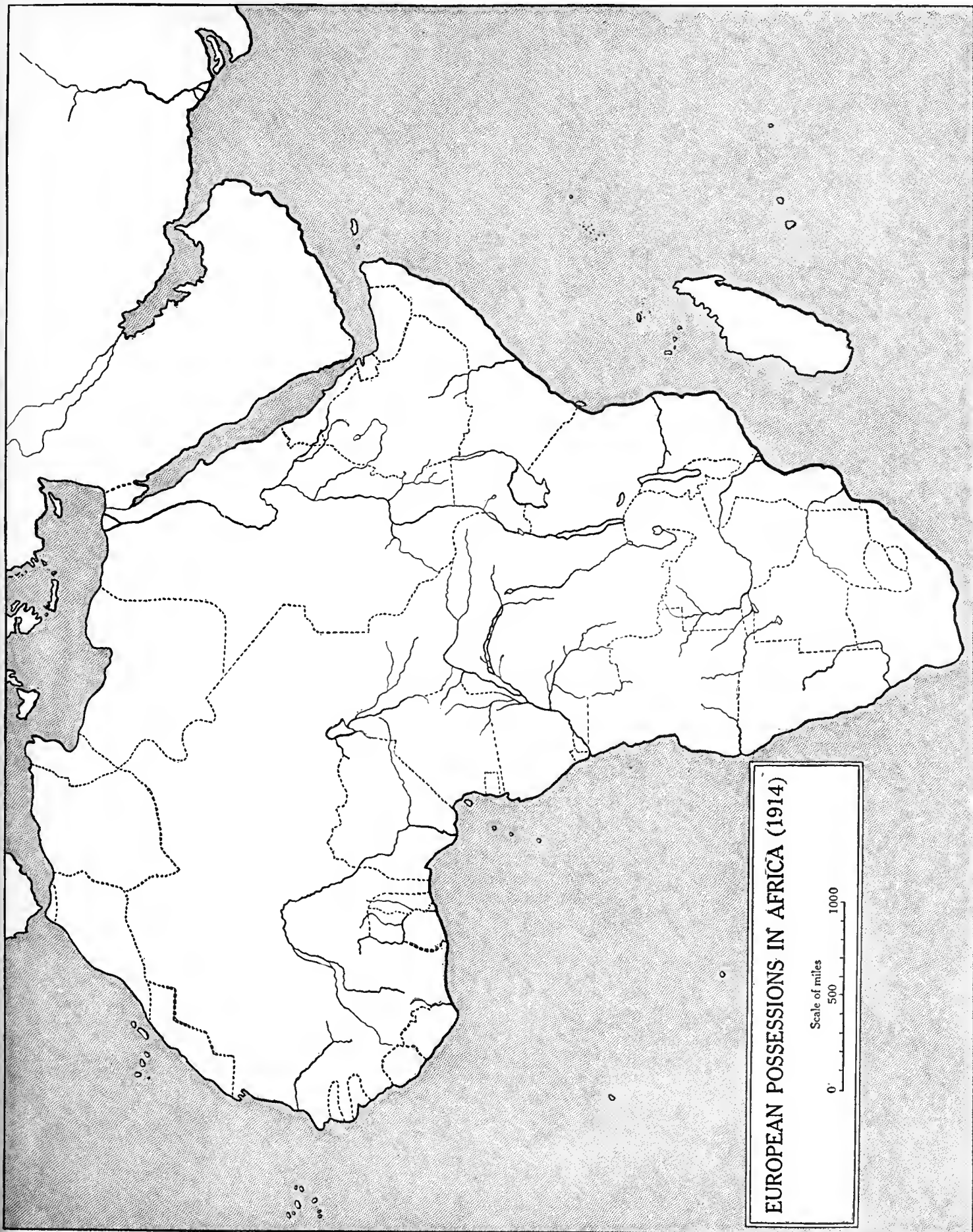
Johannsburg  
 Khartum  
 Kimberley  
 Morocco  
 Mozambique  
 Port Said  
 Pretoria  
 Tripoli  
 Tunis  
 Zanzibar

Locate the following rivers:

Kongo  
 Niger  
 Nile  
 Orange  
 Vaal  
 Zambezi

**Assignment III.** On the printed outline map show Germany's colonies in 1914 and indicate to what countries they were given by the terms of the peace treaty of 1919.





EUROPEAN POSSESSIONS IN AFRICA (1914)

Scale of miles  
0 500 1000

# LESSON XI

## THE WAR AREA OF THE WESTERN FRONT (1914-1918)

**Assignment I.** Locate the following Departments of Eastern France :

Aisne  
Ardennes  
Haute Marne  
Haute Saône  
Marne  
Meurthe-et-Moselle  
Meuse  
Nord  
Oise  
Pas de Calais  
Somme  
Vosges

Locate the following members of the German Empire :

Alsace  
Lorraine  
Palatinate  
Rhine Province

Locate Luxemburg

**Assignment II.** On the tracing sheet used for Assignment I locate the following rivers :

Garonne  
Loire  
Marne  
Meuse  
Moselle  
Po  
Rhine  
Rhone

Seine  
Somme

Locate the following bodies of water :

Bay of Biscay  
North Sea  
Strait of Dover  
English Channel  
Zuider Zee

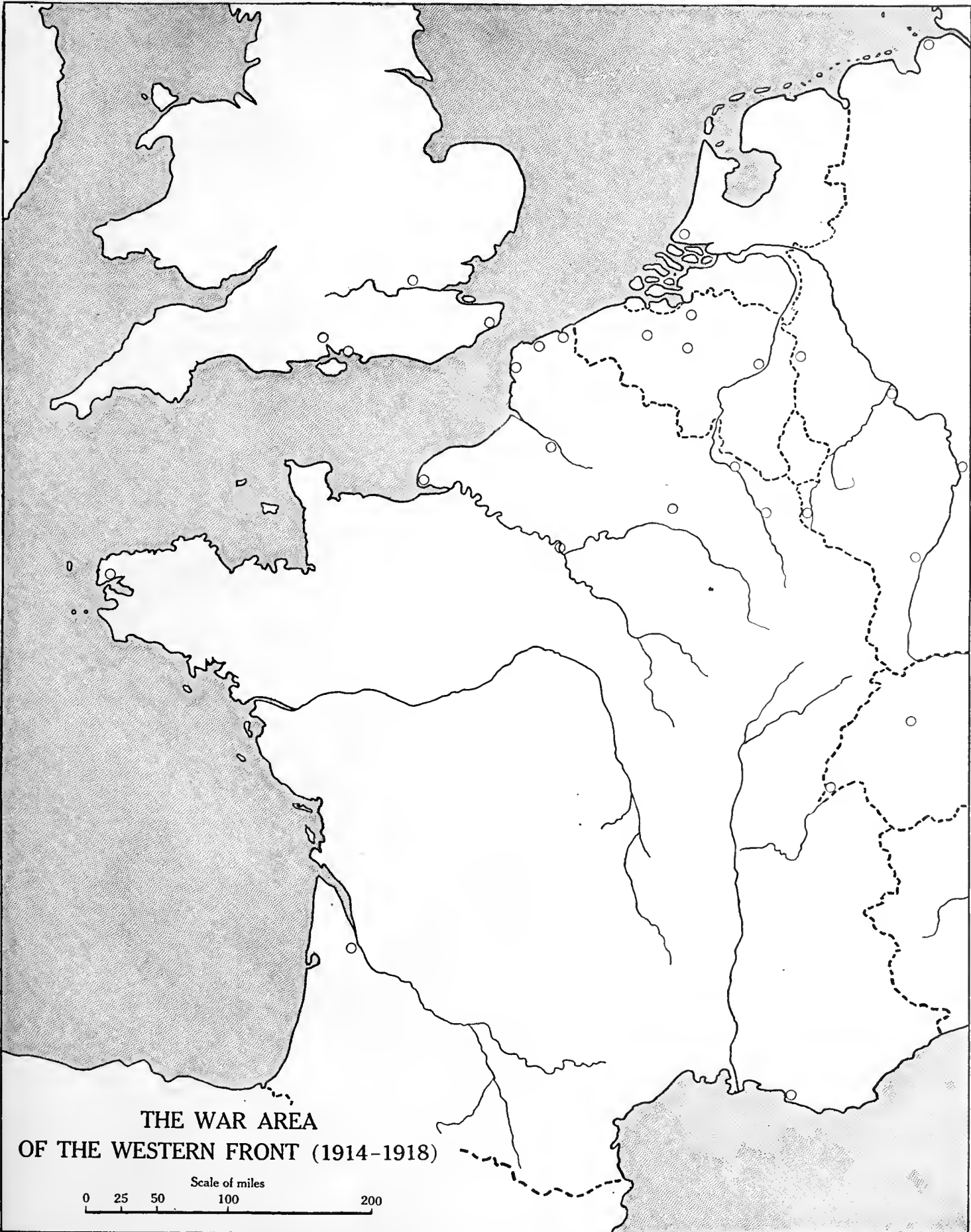
Locate Helgoland

**Assignment III.** On the printed outline map locate the following cities and towns :

Aachen  
Amiens  
Antwerp  
Belleau Wood  
Bern  
Bordeaux  
Boulogne  
Brest  
Brussels  
Calais  
Cambrai  
Cantigny  
Château-Thierry  
Chaumont  
Coblenz  
Cologne  
Compiègne  
Cuxhaven  
Dover  
Dunkirk  
Geneva  
Ghent

The Hague

Havre  
La Fere  
Lens  
Laon  
Liège  
Lille  
London  
Louvain  
Mainz  
Mannheim  
Marseilles  
Meaux  
Metz  
Mons  
Montdidier  
Namur  
Nancy  
Ostend  
Paris  
Peronne  
Portsmouth  
Reims (Rheims)  
Rouen  
St. Mihiel  
St. Quentin  
Sedan  
Seicheprey  
Soissons  
Southampton  
Strassburg  
Toul  
Verdun  
Waterloo  
Ypres



**THE WAR AREA  
OF THE WESTERN FRONT (1914-1918)**

Scale of miles  
0 25 50 100 200

# LESSON XII

## EUROPE BEFORE THE WORLD WAR (1914)

**Assignment I.** Locate the following :

Albania  
Austria-Hungary  
Belgium  
Bulgaria  
Denmark  
England  
France  
German Empire  
Greece  
Holland  
Ireland  
Italy  
Luxemburg  
Montenegro  
Norway  
Portugal  
Roumania  
Russia, showing Crimea, Finland, Lapland, Poland  
Scotland  
Servia  
Spain

Sweden  
Switzerland  
Turkey  
Wales

**Assignment II.** On the tracing sheet used for Assignment I locate the following islands :

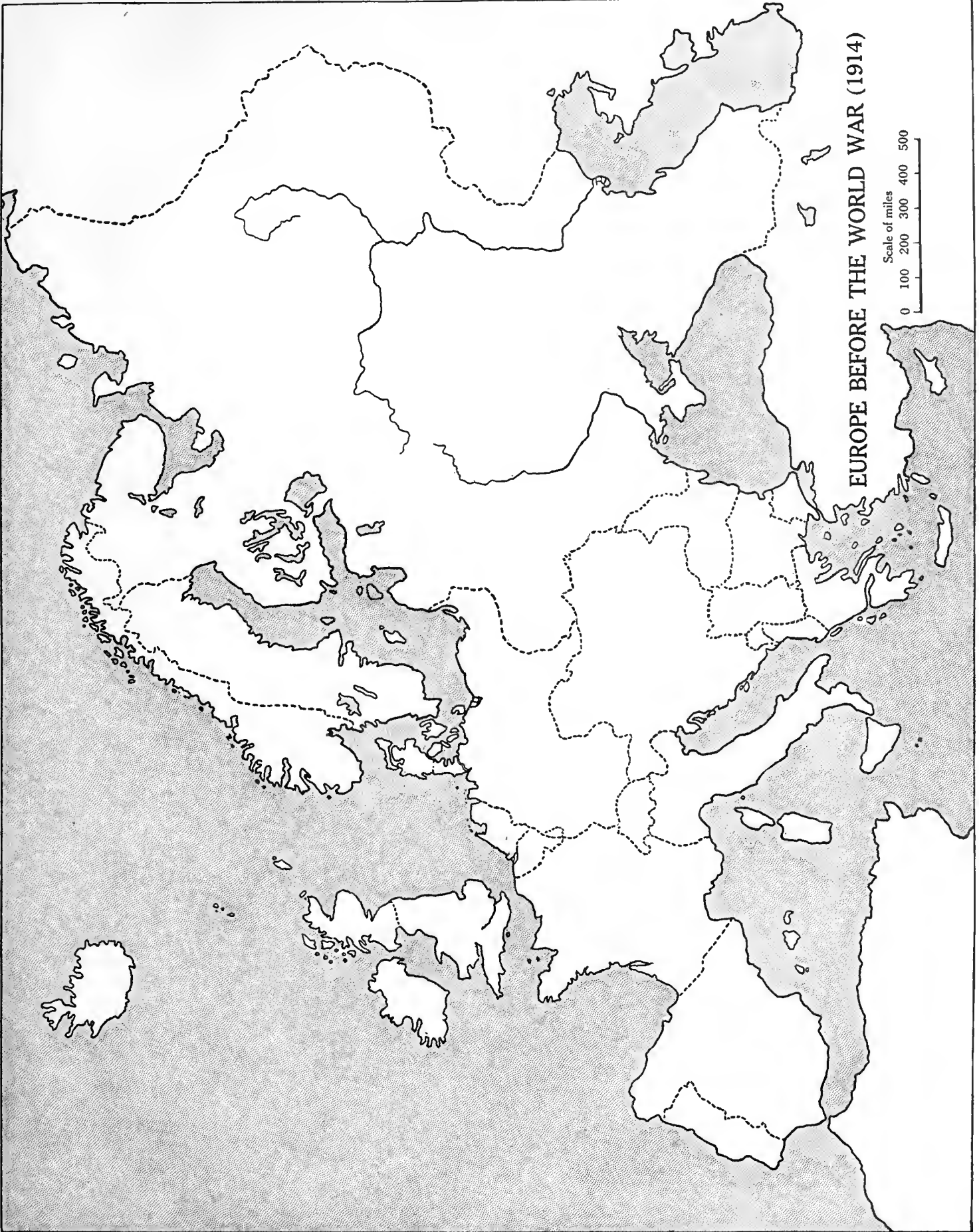
Corsica  
Crete  
Cyprus  
Iceland  
Sardinia  
Sicily

Caspian Sea  
Cattgat  
Dardanelles  
English Channel  
Gulf of Finland  
Irish Sea  
North Sea  
Sea of Azov  
Skager Rack  
Strait of Dover  
Strait of Gibraltar  
Strait of Messina  
White Sea

**Assignment III.** On the printed outline map locate the following cities :

Adriatic Sea  
Aegean Sea  
Arctic Ocean  
Baltic Sea  
Bay of Biscay  
Black Sea  
Bosporus

Cettinje (Cetigne)  
Constantinople  
Durazzo  
Erzeroum  
Geneva  
Hamburg  
Havre  
Liverpool  
London  
Madrid  
Marseilles  
Moscow  
Odessa  
Paris  
St. Petersburg  
Riga  
Rome  
Saloniki (Salonica)  
Sofia  
Stockholm  
The Hague  
Trieste  
Vienna  
Warsaw



EUROPE BEFORE THE WORLD WAR (1914)

Scale of miles  
0 100 200 300 400 500

# LESSON XIII

## THE BALKAN STATES BEFORE THE WORLD WAR (1914)

**Assignment I.** Indicate the following political divisions :

- Albania
- Austria
  - a.* Bohemia
  - b.* Moravia
- Bulgaria
- Greece
- Hungary
  - a.* Bosnia
  - b.* Croatia

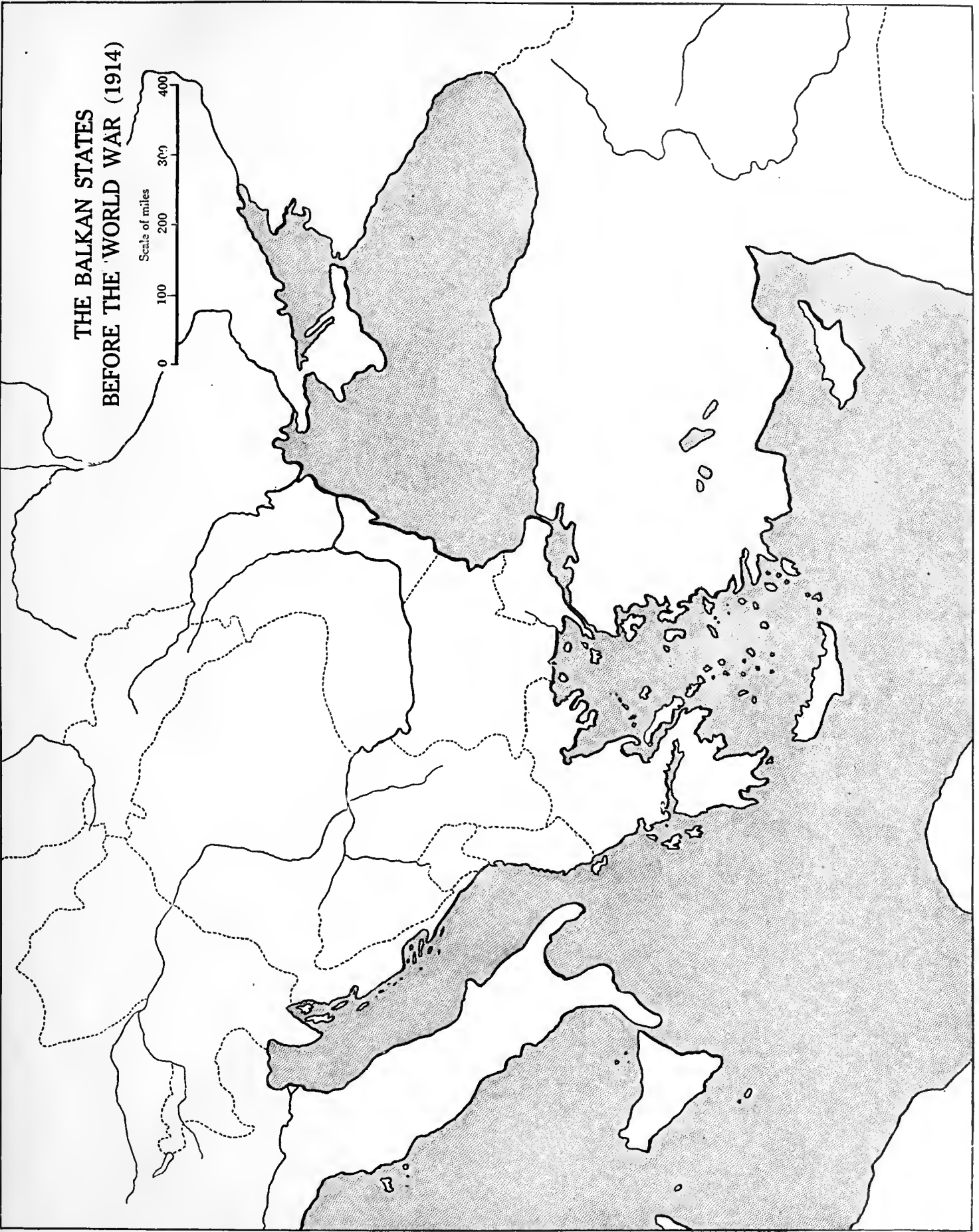
Locate the following cities :

- Adrianople
- Athens
- Belgrade
- Bucharest
- Cettinje
- Constantinople
- Durazzo
- Gallipoli
- Monastir
- Saloniki
- Sofia

**Assignment II.** Indicate on the printed outline map the boundaries, in 1907, before the Balkan wars, of

- Bulgaria
- Dalmatia
- Eastern Roumelia
- Greece
- Montenegro
- Ottoman Empire (Turkey)
- Roumania
- Servia

**THE BALKAN STATES  
BEFORE THE WORLD WAR (1914)**



## EUROPE AFTER THE WORLD WAR (1919)

**Assignment.** Trace the map on the opposite page, including the shaded and the specially marked areas. Omit the numbers and letters. Fill in the names of the countries according to the numbers given in the list below. Where there is not room to print the name, use the number, but learn the name of the country which it represents.

The letters in small circles on the printed map need not be included in the traced map, but the areas represented by them should be studied on the map and in the key.

Compare this map with that in Lesson XII and observe carefully the changes in boundaries.

### The Allies :

1. Albania
2. Belgium
3. British Isles
4. France
5. Greece
6. Italy
7. Portugal

8. Roumania
9. Russia

### The Central Powers :

10. Austria
11. Bulgaria
12. Germany
13. Hungary
31. Turkey

### Neutral countries :

14. Denmark
15. Luxembourg
16. Netherlands
17. Norway
18. Spain
19. Sweden
20. Switzerland

### New countries :

21. Czechoslovakia
22. Esthonia
23. Finland
24. Jugoslavia
25. Latvia
26. Lithuania
27. Poland
28. Ukraine
29. Georgia
30. Azerbaijan.

NOTE. See page 32 for a list of the participants in the World War.

### KEY



Parts of the territory ceded by the Central Powers.



Plebiscites (sovereignty to be determined by popular vote).



Internationalized areas.



Present settled boundary lines.



Unsettled boundary lines.

a. Ceded to Belgium by Germany: Eupen, Malmedy, and Moresnet.

b. Ceded to France by Germany: Alsace-Lorraine.

c. Free city of Danzig, surrounded by internationalized area.

d. The Memel area.

f. Upper Silesian or Oppeln Plebiscite (Polish or German control).

g. Sarre Basin. Control by League of Nations for fifteen years from 1919, after which it becomes a plebiscite.

h. Ceded to Italy by Austria: Trentino.

i. Klagenfurt Plebiscite (to Jugoslavia or Austria).

k. Ceded to Poland by Germany: portions of Pomerania, Posen, East Prussia, and West Prussia.

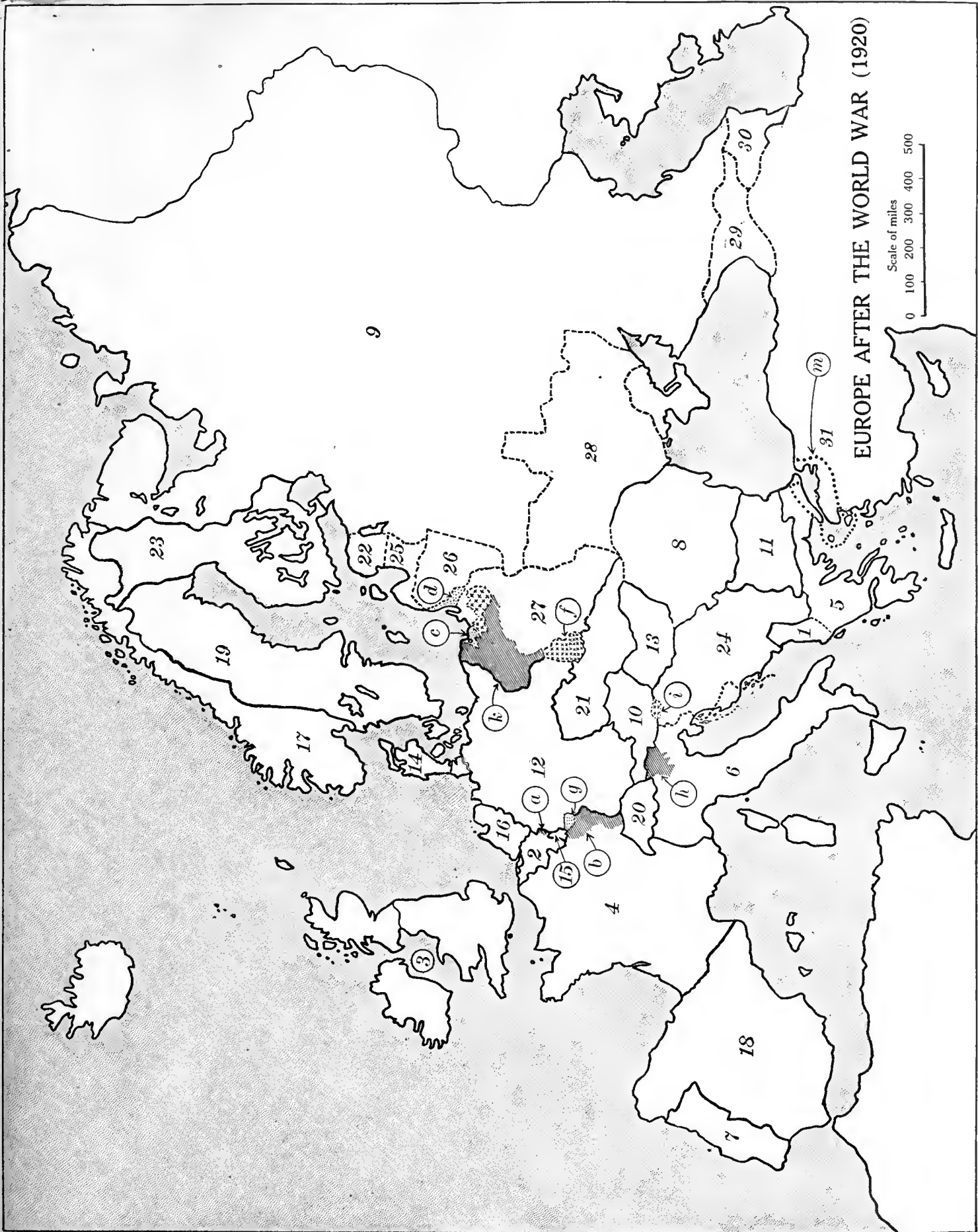
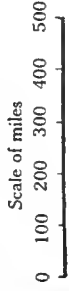
m. Zone Straits

NOTE. It may be impossible for several years to show accurately the territorial changes in Europe resulting from the World War. The map on the opposite page shows as nearly as possible at this time the changes laid out definitely and tentatively by the Peace Conference and by negotiated and pending treaties. Many boundaries are still in dispute. Italy and Jugoslavia are contending for parts of the Adriatic coast. Bulgaria desires a strip of the North Aegean coast. Various other Balkan boundaries, the divisions of the Baltic States, and the limits of Ukraine may remain unsettled for a long time.

The chief defect of most of the maps of the New Europe has been that they attempt to show too much, thereby resulting in confusion. A careful study of the simplified map on the opposite page will give a clear idea of the definite changes caused by the war, and offer a very helpful, although necessarily approximate, conception of the territorial alterations which have not yet been definitely determined.



EUROPE AFTER THE WORLD WAR (1920)



The following is a list of all the countries that became involved in the World War, together with the year in which they entered the conflict.

1914

The Allies :

France (gained territory and colonies)  
Russia (became several separate countries)  
British Empire (gained colonies)  
Belgium (gained territory)  
Serbia (became a part of Jugoslavia)

Montenegro (became a part of Jugoslavia)  
Japan (gained territory)

The Central Powers :

Germany (lost territory and colonies)  
Austria (lost territory and colonies)  
Hungary (lost territory and colonies)  
Turkey (lost territory and colonies)

1915

The Allies :

Italy (gained territory)

San Marino

The Central Powers :

Bulgaria (lost territory)

1916

The Allies :

Portugal  
Roumania (gained territory)

1917

The Allies :

United States  
Cuba  
Panama  
Greece (gained territory)

Siam  
Liberia  
China  
Brazil  
Bolivia  
Guatemala  
Honduras  
Haiti  
Nicaragua  
Santo Domingo  
Chile  
Costa Rica  
Peru  
Uruguay  
Ecuador

THIS BOOK IS DUE ON THE LAST DATE  
STAMPED BELOW

AN INITIAL FINE OF 25 CENTS  
WILL BE ASSESSED FOR FAILURE TO RETURN  
THIS BOOK ON THE DATE DUE. THE PENALTY  
WILL INCREASE TO 50 CENTS ON THE FOURTH  
DAY AND TO \$1.00 ON THE SEVENTH DAY  
OVERDUE.

SEP 11 1932

FEB 14 1933

LD 21-20m-6, '32

